

INTERNATIONAL INDIAN SCHOOL BURAIDAH

Worksheet for the Academic Year 2023-24

Name : _____ CLASS :2 () SUBJECT: MATHS DATE: _____

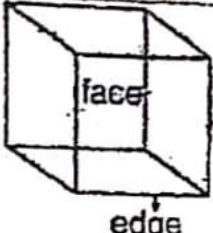
Ch# 10 THE WORLD OF SHAPES

A.Fill in the blanks.

1. A circle has no _____ and no corners.
- 2.Match box is an example of a _____.
- 3.The _____ sides of a rectangle are equal.
- 4.A _____ is an example of a sphere.
- 5.A _____ has 3 sides and 3 corners.
- 6.If you stretch a rope tightly, you get a _____ line.
- 7.Circles and ovals are made of _____ lines.
- 8.A _____ has 4 corners and 4 equal sides.
- 9.Dice is an example of a _____.
- 10.A Pepsi can is an example of a _____.

B. Write the number of faces, edges, and corners of the following solid shapes

Cube



face

edge

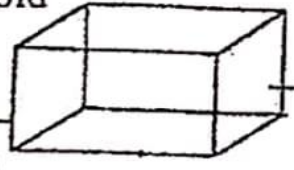
___ Faces

___ Edges

___ Corners

Every face is a **square**. All faces and edges are equal.

Cuboid



face

edge


___ Faces

___ Edges

___ Corners

The opposite surfaces are **equal**.

Cone




___ Faces

___ Edge

___ Corner

It has **one flat surface** and **one curved surface**.

Cylinder




___ Faces

___ Edge

___ Corner

It has **one curved** and **two flat surfaces**.

Sphere



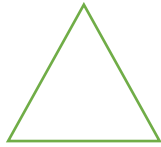
___ Face

___ Edges

___ Corners

A sphere is all round. It has only **one curved surface**.

C. Write the number of sides and corners for the following plane figures.




This is a triangle.

It has ____ sides and ____ corners



This is a square.


It has ____ corners and ____ sides.



This is a rectangle.

It has four sides and four corners.

**The _____ sides of a
Rectangle are equal.**



This is a circle.

It has ____ sides and ____ corners
