

INTERNATIONAL INDIAN SCHOOL BURAIDAH

Worksheet for the Academic Year 2023-24

Name : _____ CLASS :2 () SUBJECT: MATHS DATE: _____


Ch#12 TIME

A) Fill in the blanks:

- a. There are _____ days in a year.
- b. February has _____ days in a leap year.
- c. The short hand of a clock is _____.
- d. The long hand of a clock is _____.
- e. The hour hand takes _____ to move from one number to the next.
- f. The minute hand takes _____ to go around the entire clock.
- g. _____ is the shortest month of a year.
- h. Time 4:30 is read as _____.
- i. Time 6:45 is read as _____.
- j. Time 3:15 is read as _____.


B) Draw hour hand and minute hand on the face of the clocks to show the given time.

a. 8:30




d. 5:00

b. 1:45



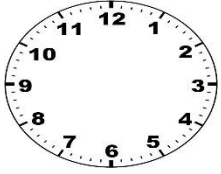


e. 3:15

c. 12:30



g. 9:30



C) Write the time shown on the face of the clocks.

