

INTERNATIONAL INDIAN SCHOOL BURAI DAH

Worksheet for the Academic Year 2023-2

Name : \_\_\_\_\_ CLASS :2 ( ) SUBJECT: MATHS DATE: \_\_\_\_\_

Ch# 13 MONEY

A) Fill in the blanks:

1. Money is counted in \_\_\_\_\_ and \_\_\_\_\_.
2. \_\_\_\_\_ is the symbol of rupees.
3. 1 rupee is written as \_\_\_\_\_.
4. Two 50 paise = \_\_\_\_\_.
5. \_\_\_\_\_ 25p coins makes 1 rupee.
6. \_\_\_\_\_ 50 paise coin and \_\_\_\_\_ 25 paise coin makes 1 rupee.
7. The \_\_\_\_\_ or the \_\_\_\_\_ separates the rupee and the paise.

B) Write in figures:

1. 120 rupees \_\_\_\_\_
2. 45 rupees 25 paise \_\_\_\_\_
3. 200 rupees 50 paise \_\_\_\_\_
4. 13 rupees 75 paise \_\_\_\_\_
5. 87 rupees 60 paise \_\_\_\_\_



C) Write in words:

1. ₹ 13.50 \_\_\_\_\_
2. ₹ 78.45 \_\_\_\_\_
3. ₹ 56.30 \_\_\_\_\_
4. ₹ 5.55 \_\_\_\_\_

5. ₹ 77.25

---

D) Count and write the total money:



E) Add:

a.

₹		
1	6	3
+	2	1

b.

₹		
2	2	5
+	0	2

### F) Subtract.




a.

₹		
1	7	4
-	2	2

b.

₹		
2	6	3
	2	1

### G) Add



 Rs 20	 Rs 35	 Rs 60
 Rs 30	 Rs 3	 Rs 40
 Rs 10	 Rs 15	 Rs 50


 +  = .....

 +  = .....

 +  = .....

 +  = .....

 +  = .....

 +  = .....

1)

Solve the following.

a. A bat cost ₹ 235 , Sonu has ₹. 75. How much more money does he need to buy the bat?




b.

A box of mangoes cost ₹.460. Radha paid ₹.500 to the shopkeeper. How much money will she get back?



---