

INTERNATIONAL INDIAN SCHOOL BURAI DAH
Worksheet for the Academic Year 2023-24
CLASS:2 SUBJECT: MATHS DATE: _____
Lesson 11 #Patterns

A. WRITE THE NUMBER THAT COMES NEXT IN THE GIVEN PATTERN.

a. 2, 4, 6, 8, _____, _____, _____, _____.


b. 5, 10, 15, 20, _____, _____, _____, _____.


c. 1, 3, 5, 7, _____, _____, _____, _____.

d. 100, 200, 300, 400, _____, _____, _____, _____.

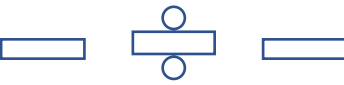
e. 80, 70, 60, 50, _____, _____, _____, _____.


B. DRAW THE SHAPES THAT COMES NEXT IN THE GIVEN SEQUENCE.

a.  _____, _____, _____.

b.  _____, _____, _____.

c.  _____, _____, _____.

d.  _____, _____, _____.

e.  _____, _____, _____.