

INTERNATIONAL INDIAN SCHOOL BURAIDAH

Worksheet - 9 for the Academic Year 2023-24

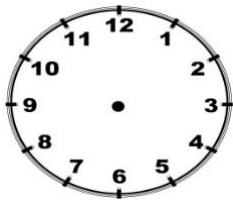
CLASS: 3 SUBJECT: MATHEMATICS DATE: _____

L-10 Time

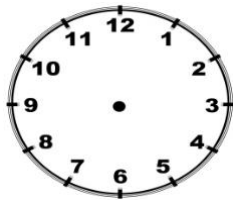
1.Fill in the blanks

- a. The short hand of a clock is called the _____.
- b. The hour hand takes _____ hour to move from one number to next.
- c. The _____ hand takes 5 minutes to move from one number to the next.
- d. The _____ hand of the clock moves the fastest.
- e. Each small division between two consecutive numbers on the clock represents a _____.
- f. 1 hour = _____ minutes.
- g. 1 minute = _____ seconds.
- h. 1 day = _____ hours.
- i. 1 week = _____ days.
- j. 1 year = _____ months.
- k. 1 year = _____ days and _____ weeks.
- l. 1 leap year = _____ days.
- m. There are _____ days in February in a leap year.
- n. 1 hour after 4:30 is _____.
- o. The day that comes after Monday is _____.
- p. 18 February 2024 can also be written as _____.

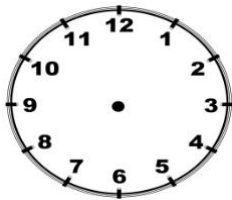
2.Draw the minute and the hour hands on the given clocks.



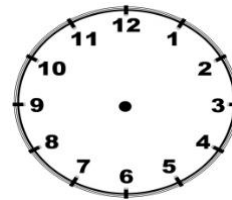
8: 20



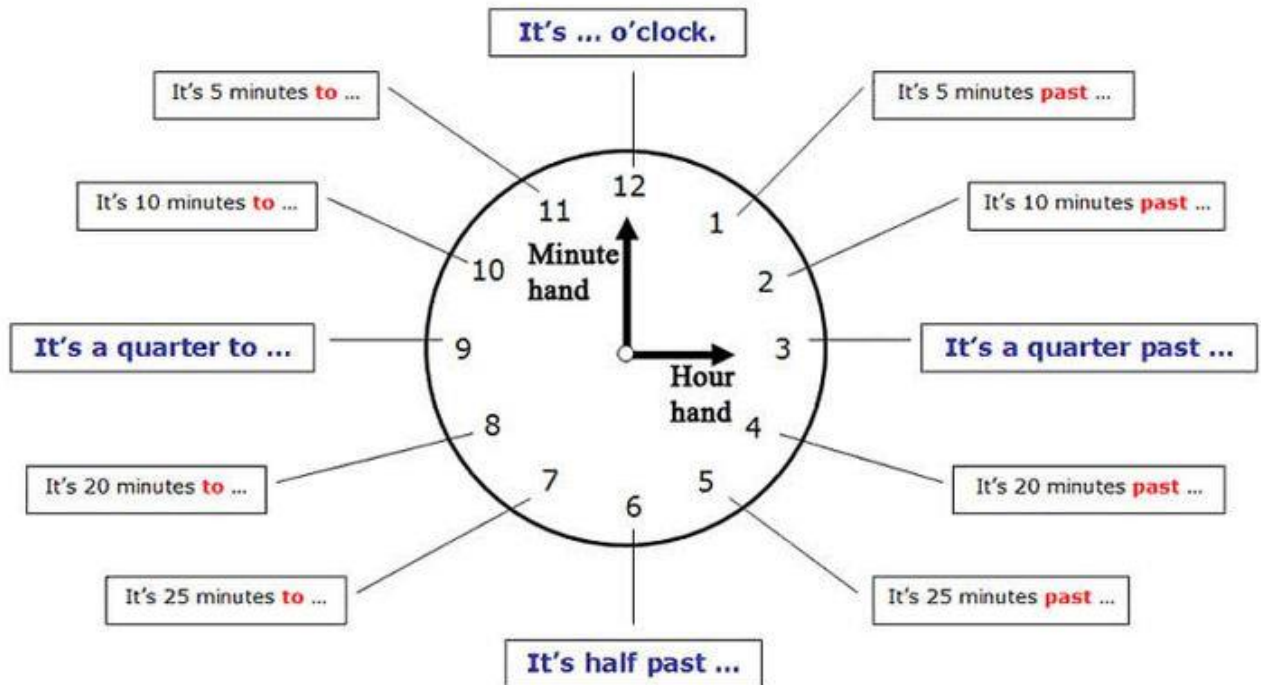
2:45



10 minutes to 7



Quarter to 10



Minute hand is bigger

Minute hand is 1 so we say
five past

Hour hand is smaller

and is pointing to 9 so we say

Five past nine

The minute hand is said first then
the hour hand

1 = 5 past

2 = ten past

3 = quarter past

4 = twenty past

5 = twenty five past

6 = half past

7 = twenty five minutes to

8 = twenty to

9 = quarter to

10 = 10 minutes to

11 = 5 minutes to

12 = o'clock



It's five past nine.



It's half past eleven.



It's ten past eight.



It's twenty-five past seven.



It's six o'clock.



It's twenty past one.



It's twenty-five to three.



It's a quarter past four.



It's twenty to eleven.

3. Express the time in two ways



