

INTERNATIONAL INDIAN SCHOOL BURAIDAH

Worksheet - 10 for the Academic Year 2023-24

CLASS: 3 SUBJECT: MATHEMATICS DATE: \_\_\_\_\_

L-11 Money

1.Fill in the blanks

- a.The symbol of rupee is \_\_\_\_\_.
- b.Twenty –five rupees fifty paise is written in short form as \_\_\_\_\_.
- c.₹ 64.35 is written in long form as \_\_\_\_\_.
- d.Rupees and paise are separated by a \_\_\_\_\_.
- e. ₹ 1 = \_\_\_\_\_ paise.

2.Count and write the total money for the following.



₹ \_\_\_\_\_

₹ \_\_\_\_\_

3.Solve.

₹	p
76	20
-16	10

₹	p
41	50
+ 36	20

₹	p
15	50
x	3

₹	p
26	50
x	6

#### 4. Divide





a) ₹ 87.15 ÷ 3

b) ₹ 45.32 ÷ 4

#### 5. Complete the given bill and find the total amount.

S.No	Item	Rate per item (₹)	Quantity	Cost	
				₹	p
1.	Pen	22	2		
2.	Book	36	4		
3.	Chocolate	45	6		
4.	Eraser	4	4		
			<b>Total</b>		

#### 6. Find the missing amounts

Amount paid	Cost of the item	Balance received
_____	 ₹769	
_____	 ₹ 177	

7. Arjun purchased a cricket bat for ₹ 865. He gave ₹ 1000 to the shopkeeper. How much amount would he get back?