

INTERNATIONAL INDIAN SCHOOL BURAI DAH

SAMPLE QUESTION PAPER (2025-26)

SUBJECT: EVS

DURATION: 2 Hr


Max.Marks:40

NAME: _____ CLASS 1/SEC: ____ GR: _____


Tick (✓) the correct options:

(5M)

1. This is an indoor game.



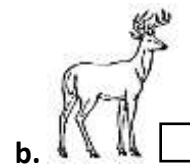
2. This is an aquatic animal.



3. This is a creeper



4. This animal is a flesh eater.



5. We dial 102 to call a/ an



B . Look at the given picture. Tick (✓) the correct option:

(3M)



The main plants you can see are

a. Pine trees ☐

b. Cactus ☐



It takes water from the soil

a. Root ☐

b. Stem ☐



It is an

a. ant ☐

b. elephant ☐

C. Name the following pictures: (Farmer / Artist / Astronaut/pilot)

(4M)



D. Fill in the blanks. Use help box.

(6M)

Republic Day	bank	monsoon	Anthem	crocodile	Insects
--------------	------	---------	--------	-----------	---------

13. Rainy season is also called _____ season.

14. Jana Gana Mana is our national _____.

15. _____ are tiny animals.

16. _____ is celebrated on 26 th January.

17. We keep money safe in a _____.

18. Skin of _____ is used to make leather.

E. Fill in the blanks:

(5M)

19. The activities that we do in our free time are called _____.
20. _____ are animals with wings and feathers.
21. _____ is the festival of lights.
22. Animals that we keep in our homes are called _____.
23. Christmas is celebrated on _____.

F. Match the following national symbols with their names.

(5M)

24.



a. National Fruit

25.



b. Chacha Nehru

26.



c. National Flower

27.



d. National Tree

28.



e. Mahatma Gandhi

G. Answer the following questions: (Any six)

(12M)

Q29. Name two examples of herb.

Q30. Name two land forms on the earth.

Q31. What is the sky?

Q32. Who are our community helpers?

Q33. Why do we use umbrellas on a rainy day?

Q34. What does the police do?

Q35. What is trunk?

Q36. What is a neighbourhood?
