

INTERNATIONAL INDIAN SCHOOL BURAIDAH
Worksheet for the Academic Year 2025 - 2026
CLASS-5 /SUBJECT : ENVIRONMENTAL STUDIES
Lesson # 6 Maps and Globes

A. Fill in the blanks.

1. _____ maps are used to display the specific details of any one aspect.
2. The _____ is an imaginary line that divides the earth into two equal halves.
3. There are _____ lines of latitude.
4. All lines on the globe are measured in _____.
5. There are _____ continents and _____ oceans on the earth.






B. Choose the correct option.

1. The vertical lines on the globe are called _____.
a) Latitudes b) Longitudes c) parallels
2. The criss-cross network of lines on globe is called
a) longitudes b) latitudes c) grid
3. The Tropic of Cancer lies at _____.
a) $23\frac{1}{2}^{\circ}\text{N}$ b) $23\frac{1}{2}^{\circ}\text{S}$ c) $66\frac{1}{2}^{\circ}\text{N}$
4. Mountains and hills are denoted by _____ colour on a map.
a) blue b) yellow c) dark brown
5. This is the largest continent of the earth.
a) Europe b) Australia c) Asia

C. Write True or False.

1. Symbols are used to represent some physical features on a map. ()
2. The Prime Meridian divides the earth into Northern and Southern Hemispheres. ()
3. The Equator marked at 0° latitude is the largest circle on the globe. ()
4. Three -fourth of the Earth's surface is covered by land . ()
5. Our country India is a part of Asia . ()

D. Match the following.

- | | |
|--|-----------------|
| 1.  | a. Viewpoint |
| 2.  | b. Carpark |
| 3.  | c. Camp site |
| 4.  | d. Lighthouse |
| 5.  | e. Caravan site |