

INTERNATIONAL INDIAN SCHOOL BURAI DAH

Worksheet for the Academic Year 2025-26

Class -5th

Subject : Maths

Date : 12/09/2025

Chapter : 14 Data

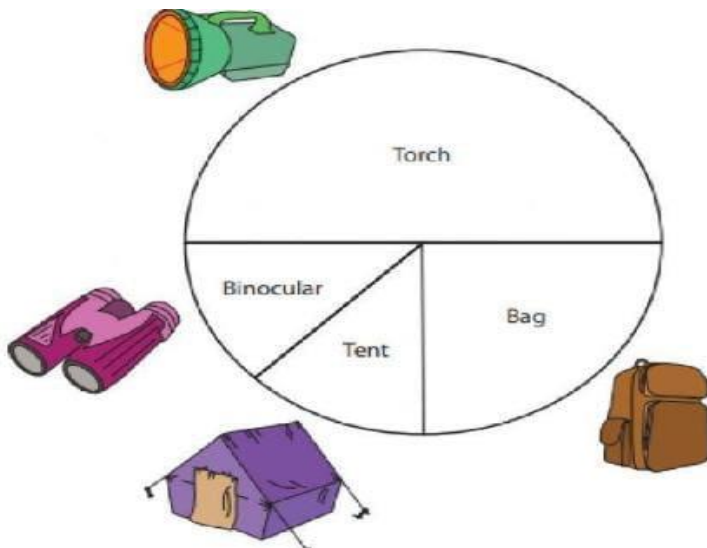
A. Fill in the blanks:

- _____ is a collection of numbers gathered to give some information.
- _____ graphs show information in different parts and put them together to form a whole.
- A _____ graph uses line segments to show how data changes over a specified period of time.
- _____ are an easy way of counting objects in groups of five.
- Each tally mark stands for _____.

B. Count and write the number.























Tally marks	Number

C. The circle graph shows the items that 80 people chose. Fill in the table to show the number of people that chose each item.



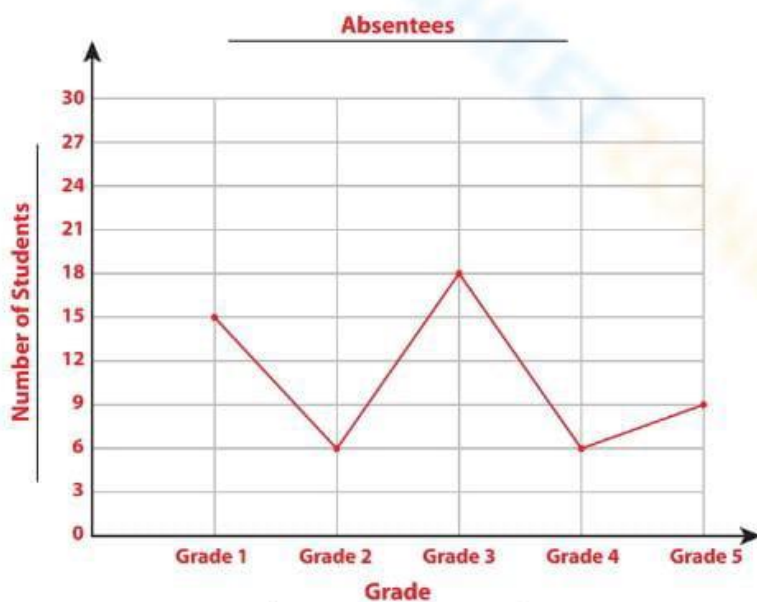
Items	No of people
Torch	
Tent	
Binocular	
Bag	

D. Use the pictograph given below to build a tally chart.

Hockey	 
Football	    
Volleyball	   
Badminton	      
Cricket	   

 = 4 vote

E. The number of absentees from grade 1 to grade 5 at a school in a month are given below. Study the graph and answer the questions.



- a. How many students absent in grade 5?
- b. In which grade most number of students are absent?
- c. In which grade least number of students are absent?
- d. In which two grades equal number of students are absent?

F. Sara recorded the number of ballet classes she had for 5 months. Draw a line graph using the given data.



Month	Number of classes
January	8
February	7
March	6
April	10
May	5

