

INTERNATIONAL INDIAN SCHOOL BURAIDAH

Worksheet for the academic year 2026-2027

Maths Worksheet# 01

Topic: Ch#1 Number up to 50

Name: _____ Class: 1 () Date: _____

A. Fill in the blanks:

- a. The number name of 15 is _____.
- b. What number comes before 40 _____.
- c. What number comes after 9 _____.
- d. What number comes in between 38 and 40 _____.
- e. 42,41,40, _____, _____, _____.
- f. 1 ten and 4 ones = _____.
- g. 2 tens = _____
- h. 4 tens and 6 ones = _____
- i. 2 tens and 2 ones = _____
- j. 1 ten = _____

B. Write the number names:

8 _____

10 _____

12 _____

19 _____

36 _____

40 _____

49 _____

16 _____

50 _____

23 _____

C. Ring the smallest number:

11	22	9
----	----	---

26	12	21
----	----	----

D. Arrange the numbers in order.

Smallest to biggest (Increasing order)

Biggest to smallest(Decreasing order)

34	38	27

15	17	18

E. Ring the bigger number:

15	50
----	----

10	20
----	----

49	39
----	----

F. Write the number that comes after, before and between.

Before

	10
	25
	46

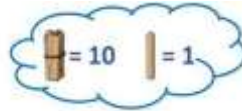
Between

17		19
28		30
38		40

After

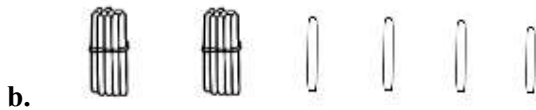
16	
49	
33	

G. Each Bundle has 10 Sticks. Count the group of tens and ones. Then write the correct number of tens and ones in the boxes to the right.



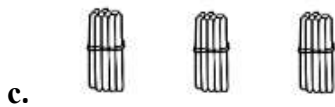
Tens	Ones

The number is _____



Tens	Ones

The number is _____



Tens	Ones

The number is _____



Tens	Ones

The number is _____